


# Day One

## Making a Whole

### Activity 1



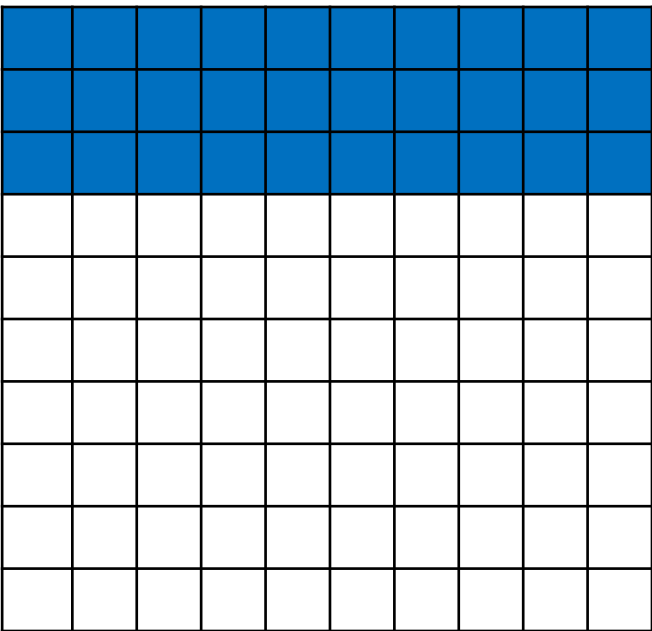
Here is a hundred square.

How many hundredths are shaded?

How many more hundredths do you need to shade so the whole hundred square is shaded?

\_\_\_ hundredths + \_\_\_ hundredths = 1 whole

### Activity 2



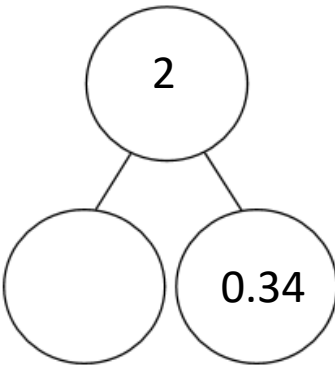
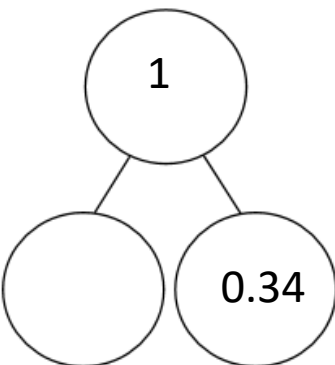
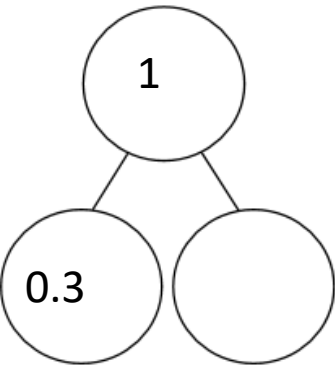
Here is a hundred square.

How many hundredths are shaded?

How many more hundredths do you need to shade so the whole hundred square is shaded?

\_\_\_ hundredths + \_\_\_ hundredths = 1 whole

### Activity 3: Complete the part-whole models



**Activity 4:** Which part-whole model does not match the hundred square? Explain your answer.

